







# Subtraction within 10

Subtract, then tick the correct box.

	$4 - 1 =$	<input type="checkbox"/> 2	<input type="checkbox"/> 1	<input checked="" type="checkbox"/> 3	<input type="checkbox"/> 5
	$6 - 2 =$	<input type="checkbox"/> 8	<input type="checkbox"/> 5	<input type="checkbox"/> 3	<input type="checkbox"/> 4
	$8 - 5 =$	<input type="checkbox"/> 4	<input type="checkbox"/> 3	<input type="checkbox"/> 2	<input type="checkbox"/> 1
	$9 - 3 =$	<input type="checkbox"/> 8	<input type="checkbox"/> 6	<input type="checkbox"/> 7	<input type="checkbox"/> 5
	$7 - 5 =$	<input type="checkbox"/> 3	<input type="checkbox"/> 2	<input type="checkbox"/> 4	<input type="checkbox"/> 1
	$10 - 4 =$	<input type="checkbox"/> 5	<input type="checkbox"/> 6	<input type="checkbox"/> 7	<input type="checkbox"/> 3

# Subtraction within 10

Answers

4 - 1 =

6 - 2 =

8 - 5 =

9 - 3 =

7 - 5 =

10 - 4 =