

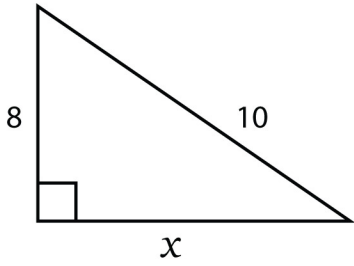


# Geometry - Pythagorean Theorem

1)

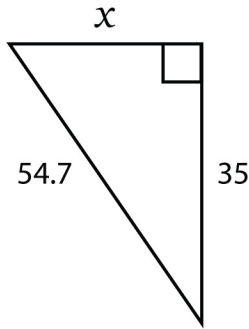
Answers

a)



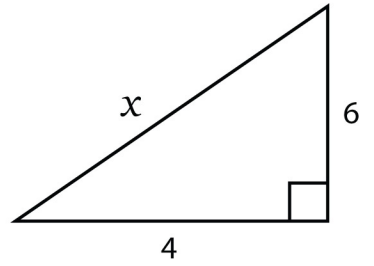
$x = \underline{6}$

b)



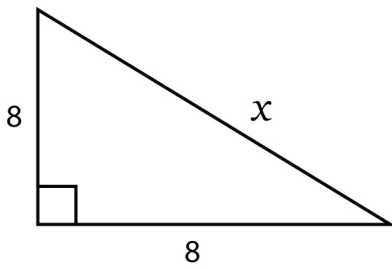
$x = \underline{42}$

c)



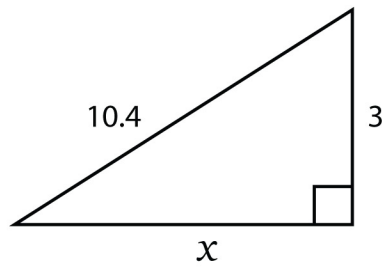
$x = \underline{7.2}$

d)



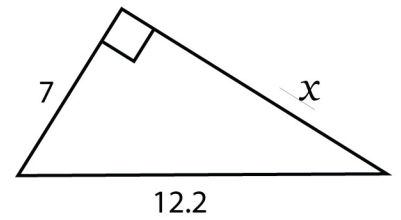
$x = \underline{11.31}$

e)



$x = \underline{10}$

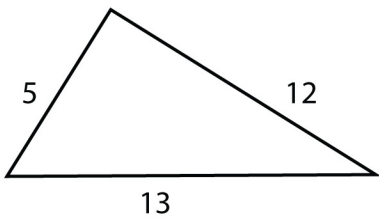
f)



$x = \underline{10}$

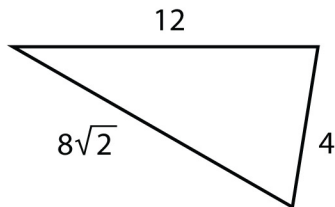
2)

a)



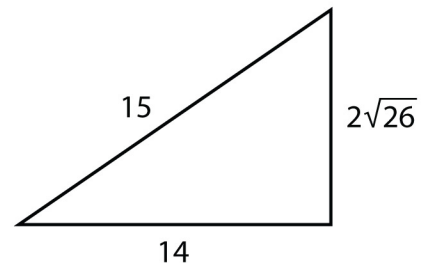
Yes

b)



Yes

c)



No