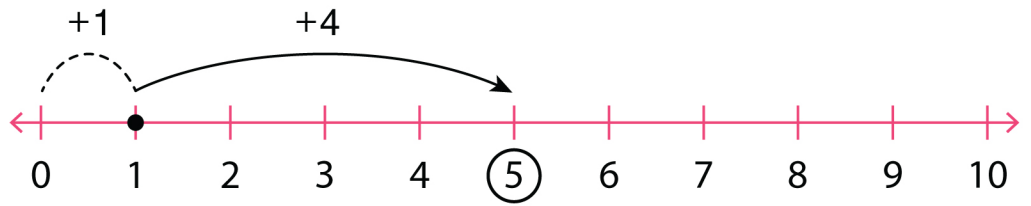


Number Line Worksheet

Complete the addition sentences using the number lines.

Example:

$1 + 4 = 5$



1. $5 + 4 =$



2. $3 + 3 =$



3. $9 + 1 =$



4. $2 + 5 =$



5. $6 + 3 =$



6. $4 + 2 =$



7. $8 + 2 =$

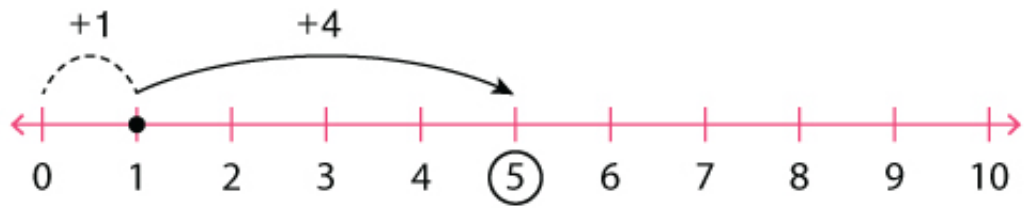


Number Line Worksheet

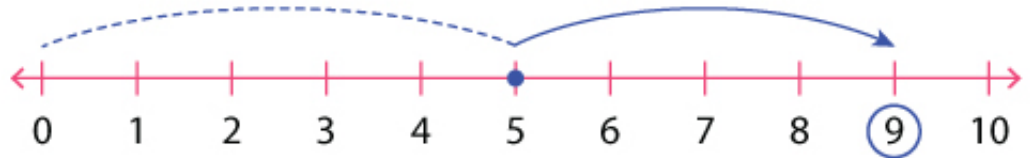
Answers

Example:

$$1 + 4 = 5$$



1. $5 + 4 = 9$



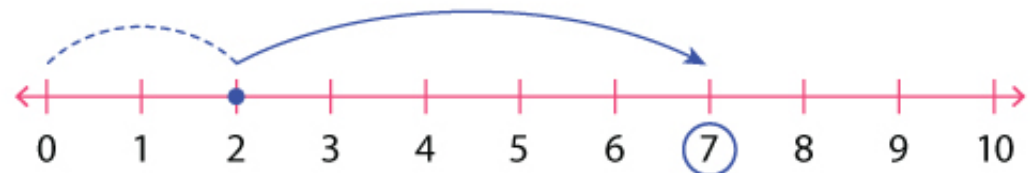
2. $3 + 3 = 6$



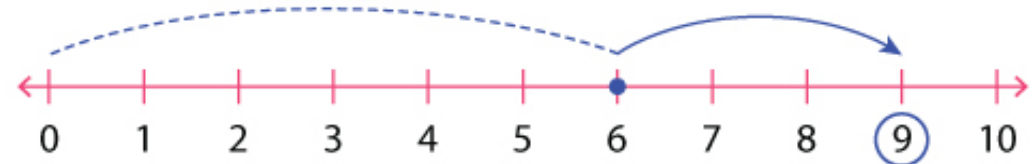
3. $9 + 1 = 10$



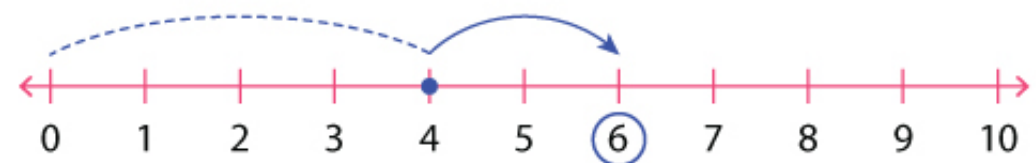
4. $2 + 5 = 7$



5. $6 + 3 = 9$



6. $4 + 2 = 6$



7. $8 + 2 = 10$

