

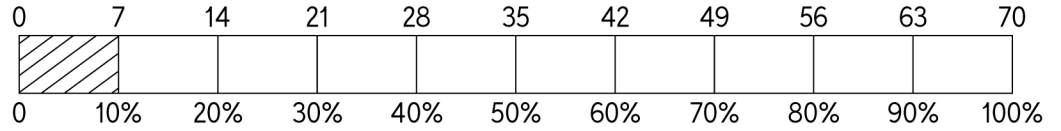
Name: \_\_\_\_\_

Date: \_\_\_\_\_

# Percent Bar Model

Use the bar model to find the given percentages. One is done for you.


1 10% of 70  
7  
\_\_\_\_\_



2 20% of 40  
\_\_\_\_\_



3 60% of 120  
\_\_\_\_\_



4 20% of 150  
\_\_\_\_\_



5 10% of 100  
\_\_\_\_\_



6 60% of 200  
\_\_\_\_\_



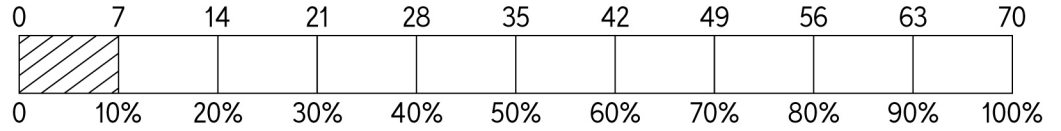
Name: \_\_\_\_\_

Date: \_\_\_\_\_

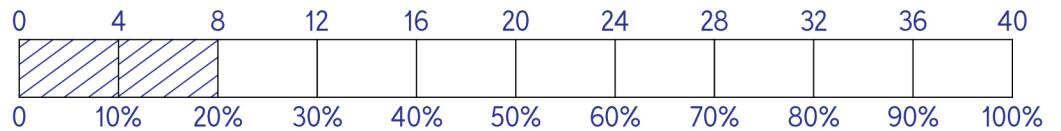
# Percent Bar Model

## Answers

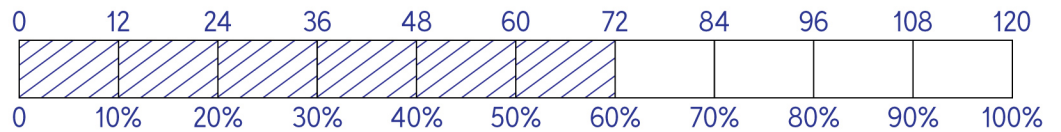
1 10% of 70  
7



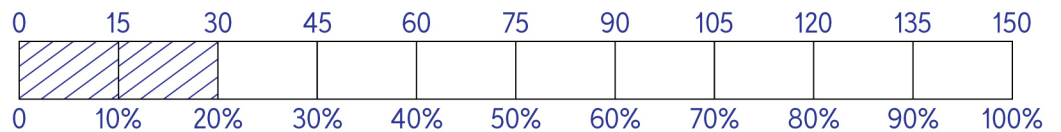
2 20% of 40  
8



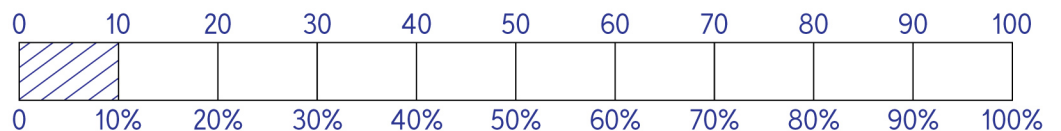
3 60% of 120  
72



4 20% of 150  
30



5 10% of 100  
10



6 60% of 200  
120

