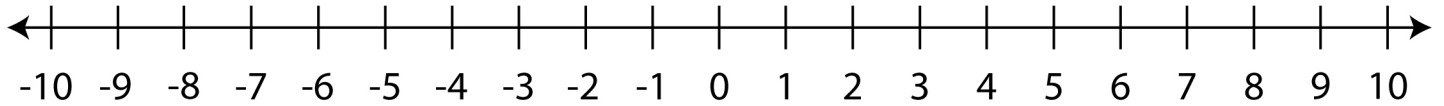


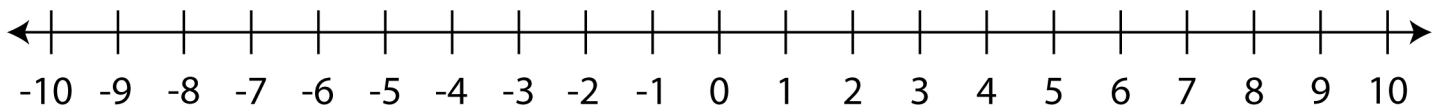
# Integers on a Number Line

A. Locate the integers on the number line.

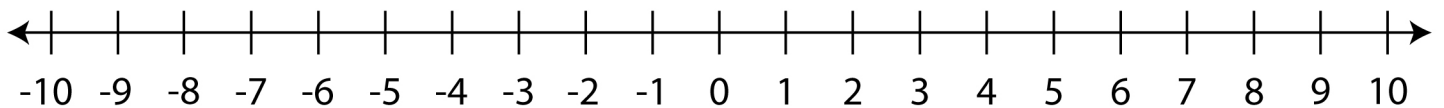
1. -3, 9, 2, -1, 4



2. 10, -7, -2, 5, -6



B. Answer the following questions using the number line.



1. 1 unit to the right of -5 is

2. 6 units to the left of 8 is

3. 3 units to the left of -7 is

4. 5 units to the right of 2 is

5. 12 units to the right of -4 is

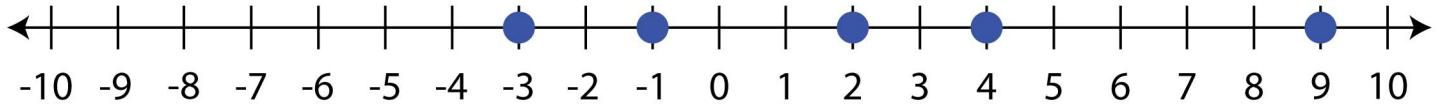
6. 8 units to the left of 9 is

7. 10 units to the right of -6 is

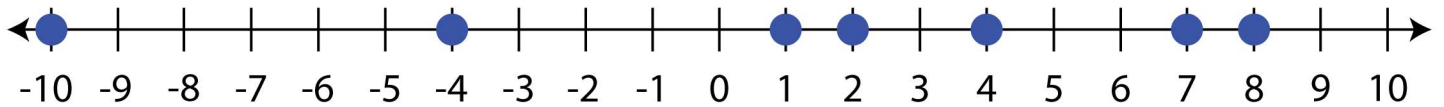
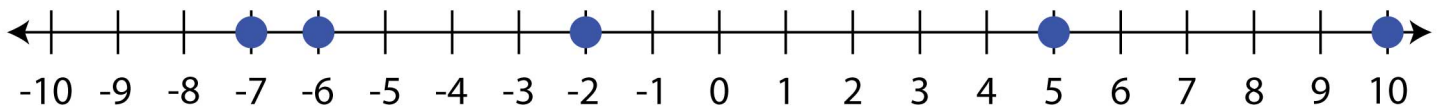
# Integers on a Number Line

## Answers

1. -3, 9, 2, -1, 4



2. 10, -7, -2, 5, -6



1. 1 unit to the right of -5 is

-4

2. 6 units to the left of 8 is

2

3. 3 units to the left of -7 is

-10

4. 5 units to the right of 2 is

7

5. 12 units to the right of -4 is

8

6. 8 units to the left of 9 is

1

7. 10 units to the right of -6 is

4