

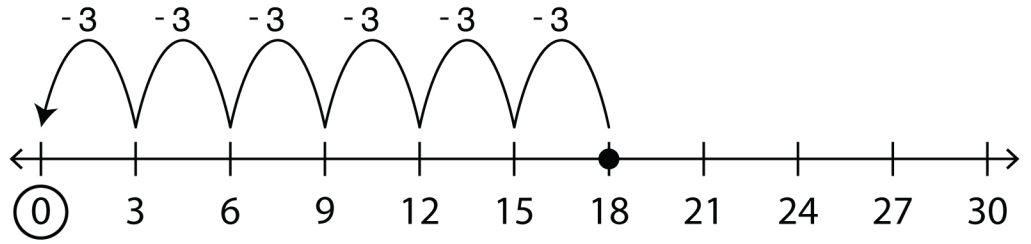
Worksheet on Number Line

Complete the division sentences using the given number lines.

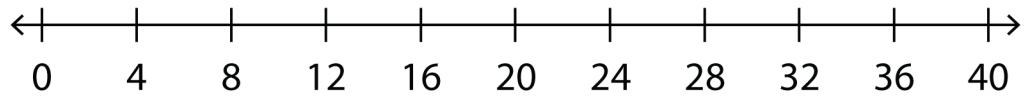
Example:

$18 \div 3 =$

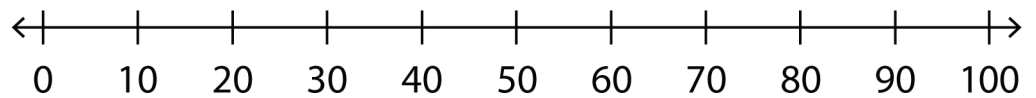
6



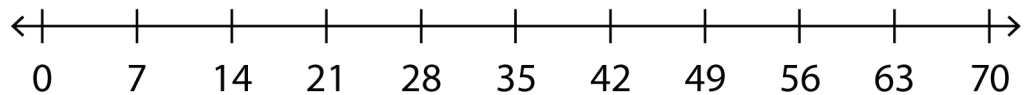
① $28 \div 4 =$



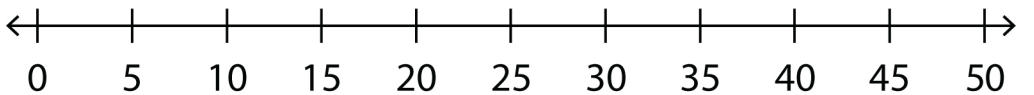
② $80 \div 10 =$



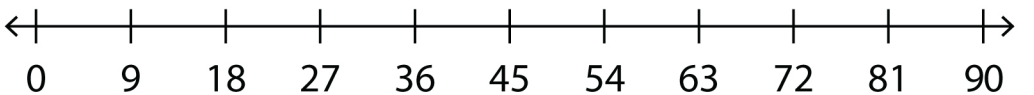
③ $42 \div 7 =$



④ $15 \div 5 =$



⑤ $81 \div 9 =$

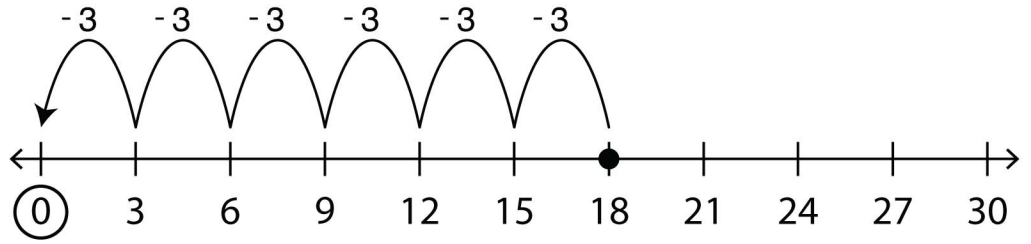


Worksheet on Number Line

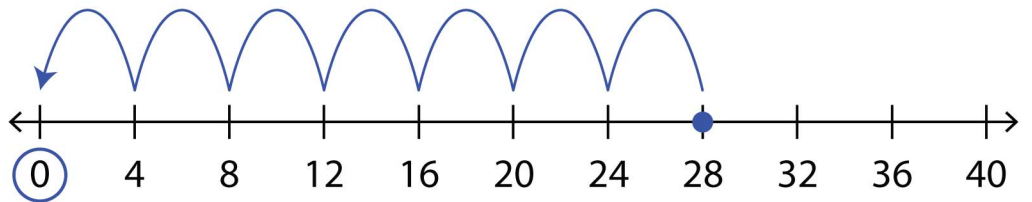
Answers

Example:

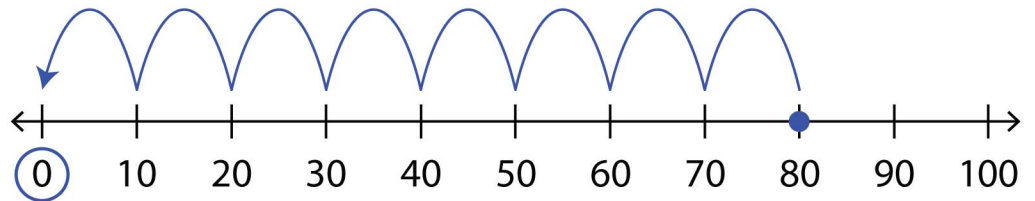
$$18 \div 3 = \boxed{6}$$



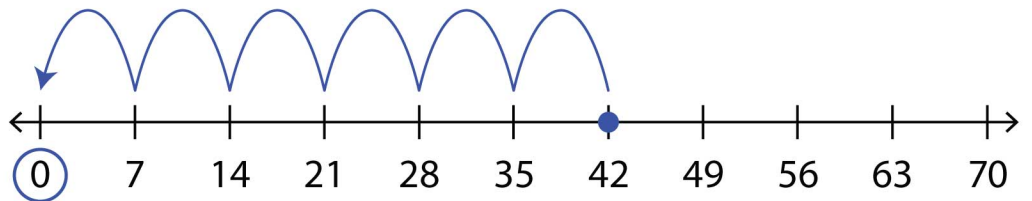
$$\textcircled{1} \quad 28 \div 4 = \boxed{7}$$



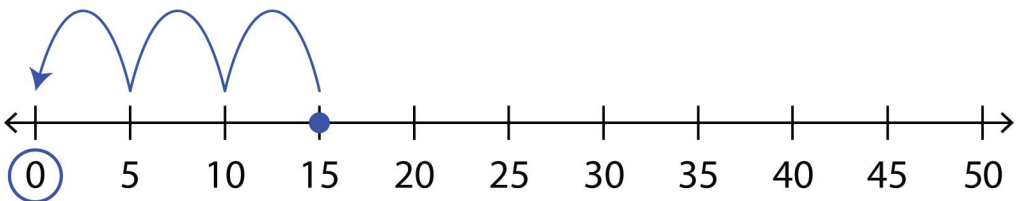
$$\textcircled{2} \quad 80 \div 10 = \boxed{8}$$



$$\textcircled{3} \quad 42 \div 7 = \boxed{6}$$



$$\textcircled{4} \quad 15 \div 5 = \boxed{3}$$



$$\textcircled{5} \quad 81 \div 9 = \boxed{9}$$

