

# Estimating Measures

Estimate the length of each object as seen in your everyday life.

1.



- a 6 inches
- b 4 yards
- c 6 miles

2.




- a 1 foot
- b 2 inches
- c 3 cups

3.



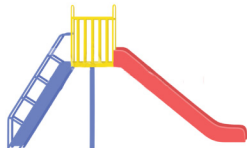
- a 24 inches
- b 26 cups
- c 18 miles

4.



- a 1 mile
- b 2 inches
- c 1 foot

5.



- a 2 feet
- b 3 yards
- c 7 inches

6.



- a 6 feet
- b 6 inches
- c 6 yards

7.



- a 16 yards
- b 16 inches
- c 8 feet

8.



- a 1 foot
- b 3 yards
- c 15 miles

9.



- a 2 yards
- b 2 miles
- c 2 inches

10.



- a 25 feet
- b 24 inches
- c 32 yards

# Estimating Measures

## Answers

1.



- a 6 inches
- b 4 yards
- c 6 miles

2.



- a 1 foot
- b 2 inches
- c 3 cups

3.



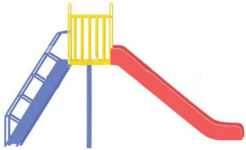
- a 24 inches
- b 26 cups
- c 18 miles

4.



- a 1 mile
- b 2 inches
- c 1 foot

5.



- a 2 feet
- b 3 yards
- c 7 inches

6.



- a 6 feet
- b 6 inches
- c 6 yards

7.



- a 16 yards
- b 16 inches
- c 8 feet

8.



- a 1 foot
- b 3 yards
- c 15 miles

9.



- a 2 yards
- b 2 miles
- c 2 inches

10.



- a 25 feet
- b 24 inches
- c 32 yards