

# Measurement Quiz

[1] Which is the longest?

1 in

1 ft

1 yd

[2] Identify the appropriate unit to measure the given objects.

a) Length of 

in

pt

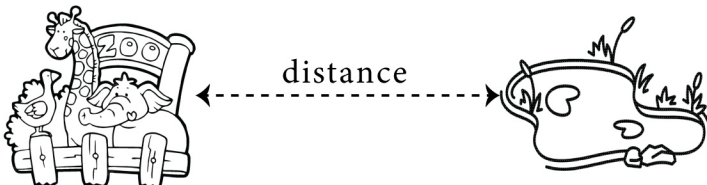
yd

b) Capacity of 

ft

lb


c

c)  distance

mi

pt

qt

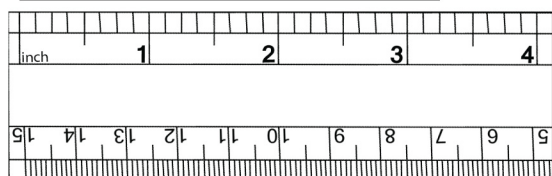
d) Weight of 

c

lb

yd

[3] 




Length in inches  in

[4] What does this scale measure?

length

weight

height

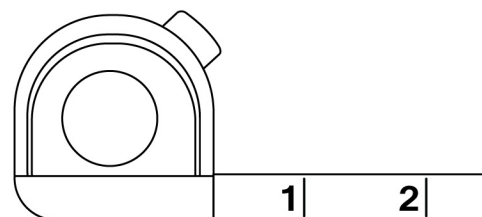


[5] What does this scale measure?

height

volume

weight

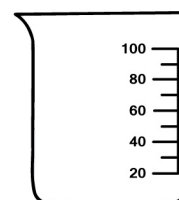


[6] What does this scale measure ?

weight

volume

length



# Measurement Quiz

## Answers

[1] Which is the longest?

1 in

1 ft

1 yd

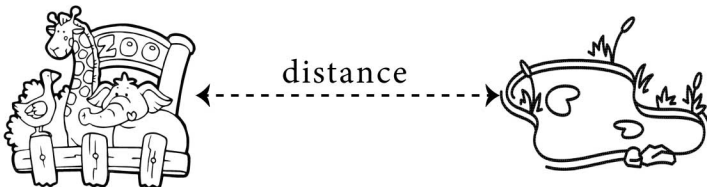
[2] Identify the appropriate unit to measure the given objects.

a) Length of 


in  pt  yd

b) Capacity of 

ft  lb  c

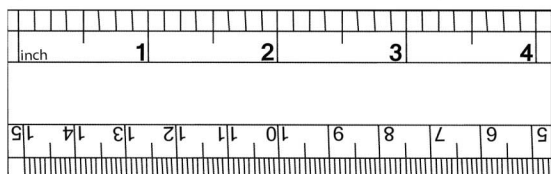
c)  distance

mi  pt  qt

d) Weight of 

c  lb  yd


[3] 



Length in inches  in

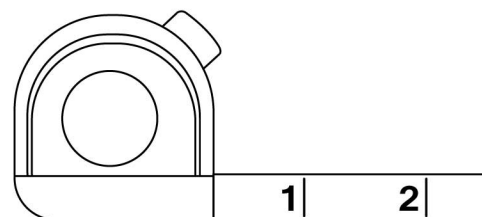
[4] What does this scale measure?

length  weight  height



[5] What does this scale measure?

height  volume  weight



[6] What does this scale measure ?

weight  volume  length

