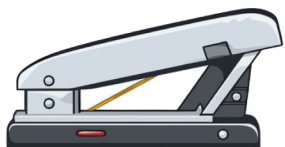


# Measuring Things


Find the given objects in your surroundings and use a ruler to measure their lengths.



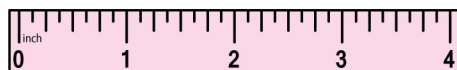
\_\_\_\_\_ inches



\_\_\_\_\_ inches



\_\_\_\_\_ inches



\_\_\_\_\_ inches



\_\_\_\_\_ inches



\_\_\_\_\_ inches



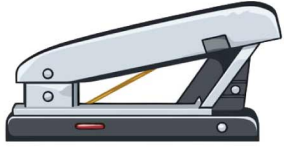
\_\_\_\_\_ inches



\_\_\_\_\_ inches

# Measuring Things

## Answers



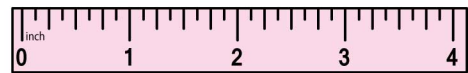
2 inches



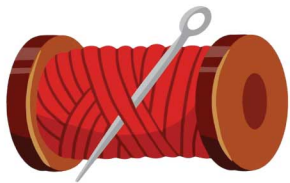
3 inches



3 inches



4 inches



2 inches



3 inches



6 inches



5 inches