


Name:

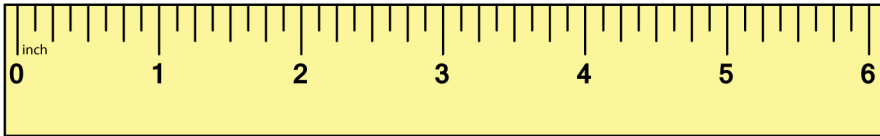
Date:

Measuring Length Worksheet

Measure the length of each bar and answer accordingly.

[a]  Bar A _____ inches

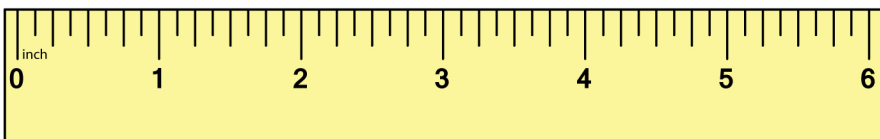
 Bar B _____ inches



About how many inches longer is B than A ? _____ inches

[b]  Bar C _____ inches

 Bar D _____ inches

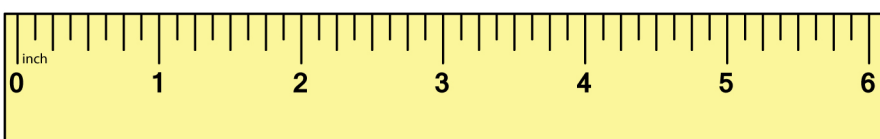


About how many inches longer is D than C ? _____ inches

[c]  Bar K _____ inches

 Bar L _____ inches

 Bar M _____ inches



About how many inches longer is L than K ? _____ inches

About how many inches shorter is M than L ? _____ inches

Name:

Date:

Measuring Length Worksheet


Answers

[a]  Bar A

2 inches

 Bar B

3 inches



About how many inches longer is B than A ?

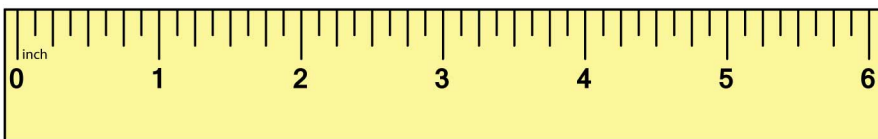
1 inches

[b]  Bar C

2 inches

 Bar D

4 inches



About how many inches longer is D than C ?

2 inches

[c]  Bar K

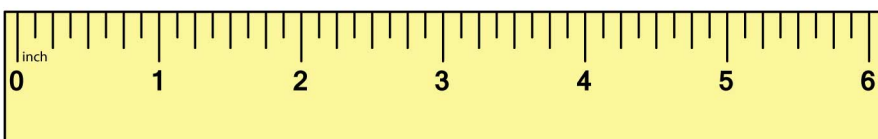
3 inches

 Bar L

4 inches

 Bar M

2 inches



About how many inches longer is L than K ?

1 inches

About how many inches shorter is M than L ?

2 inches