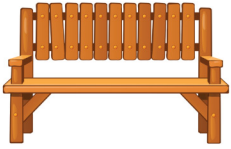


Measuring in Feet

Measure the objects in feet and tick the correct option.

1




4 feet

2 feet

3 feet

5 feet

2



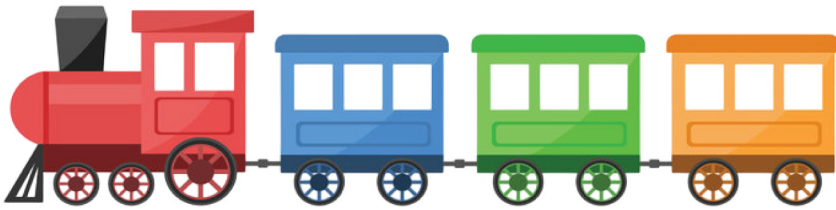
5 feet

4 feet

1 feet

2 feet

3




7 feet

5 feet

6 feet

8 feet

4



8 feet

5 feet

4 feet

7 feet

5



7 feet

9 feet

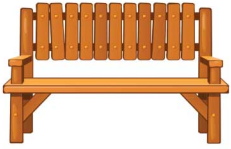
2 feet

5 feet

Measuring in Feet

Answers

1



4 feet

2 feet

3 feet

5 feet

2



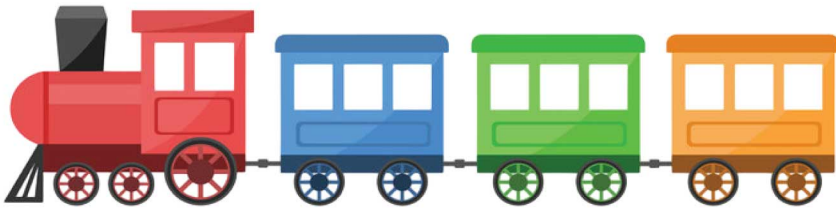
5 feet

4 feet

1 foot

2 feet

3




7 feet

5 feet

6 feet

8 feet

4



8 feet

5 feet

4 feet

7 feet

5



7 feet

9 feet

2 feet

5 feet