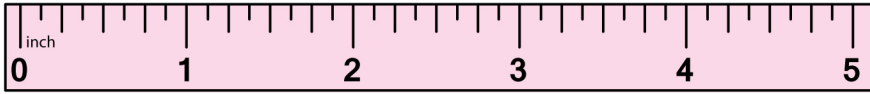


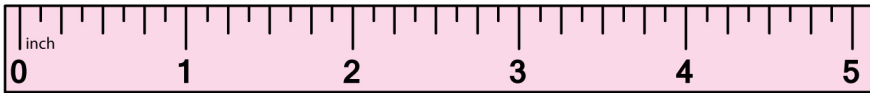

Name: _____

Measurements Using a Ruler


Use the ruler to measure the following objects. One is done for you.



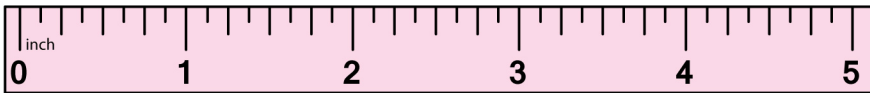
$3\frac{1}{8}$ in



in



in



in



in



in

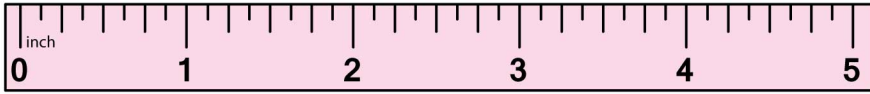


in

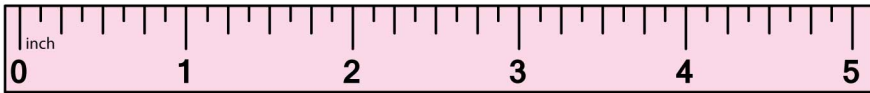
Name: _____

Measurements Using a Ruler

Answers



$3\frac{1}{8}$ in



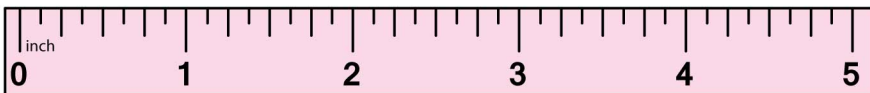
1 in



$4\frac{3}{4}$ in



$3\frac{7}{8}$ in



$2\frac{5}{8}$ in



$1\frac{7}{8}$ in



3 in