

Name: _____ Date: _____

Measuring Units

Convert:

① 24.4 yd = _____ ft

② 174 pt = _____ c

③ 142 c = _____ pt

④ 19 gal = _____ c

⑤ 68 qt = _____ pt

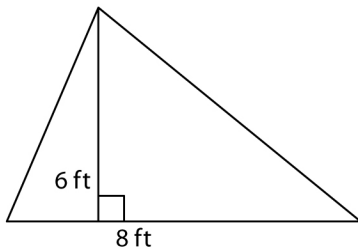
⑥ 1.9 lb = _____ oz

⑦ 76 c = _____ fl oz

⑧ 6.2 ft = _____ in

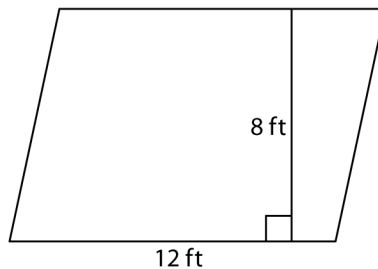
Calculate (round off to the nearest whole number, wherever needed)

①



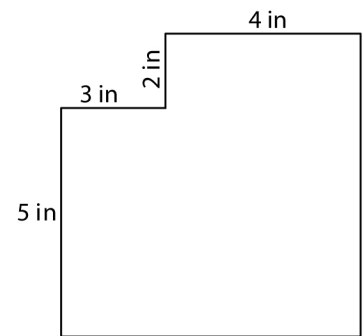
Area = _____

②



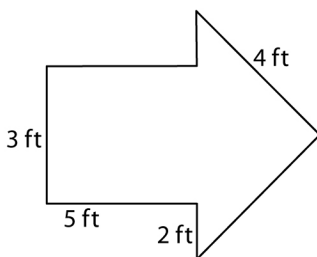
Area = _____

③



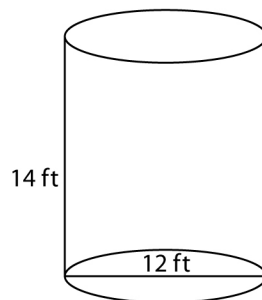
Perimeter = _____

④



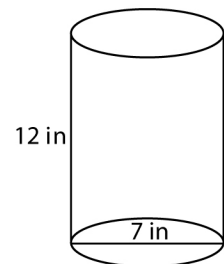
Perimeter = _____

⑤



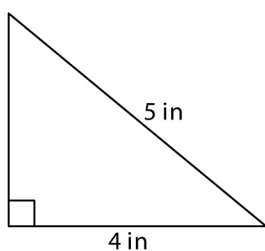
Volume = _____

⑥



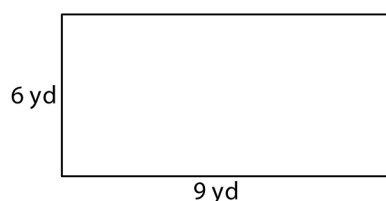
Volume = _____

⑦



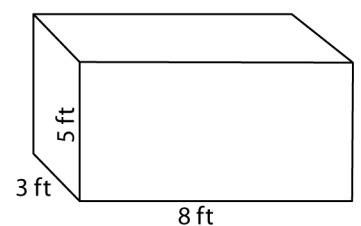
Area = _____

⑧



Perimeter = _____

⑨



Volume = _____

Measuring Units

Answers

① 24.4 yd = 73.2 ft

② 174 pt = 348 c

③ 142 c = 71 pt

④ 19 gal = 304 c

⑤ 68 qt = 136 pt

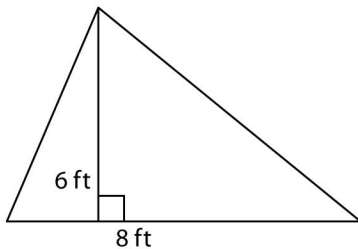
⑥ 1.9 lb = 30.4 oz

⑦ 76 c = 608 fl oz

⑧ 6.2 ft = 74.4 in

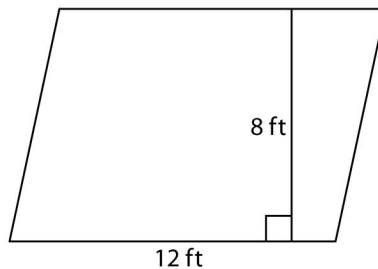
Calculate (round off to the nearest whole number, wherever needed)

①



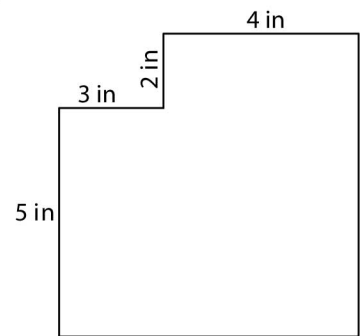
Area = 24 ft²

②



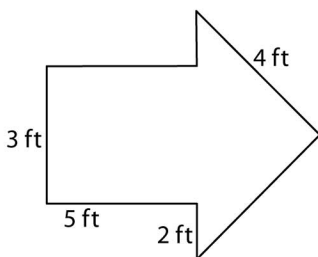
Area = 96 ft²

③



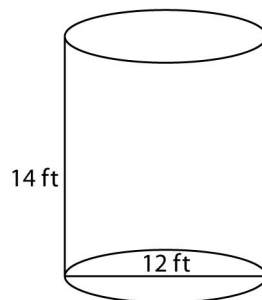
Perimeter = 28 in

④



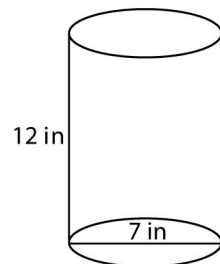
Perimeter = 25 ft

⑤



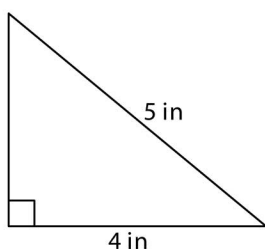
Volume = 1583 ft³

⑥



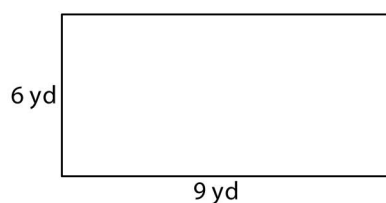
Volume = 462 in³

⑦



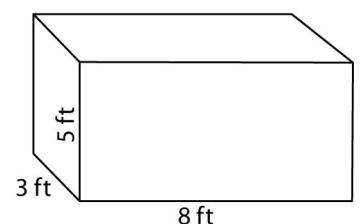
Area = 6 in²

⑧



Perimeter = 30 yd

⑨



Volume = 120 ft³