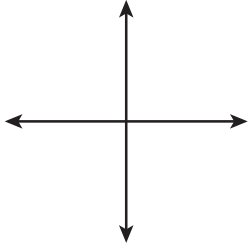


Name: _____

Parallel, Perpendicular, and Intersecting Lines

Identify each pair of lines and tick the correct option.

1



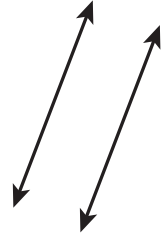
- Parallel lines
- Perpendicular lines
- Intersecting lines

2



- Parallel lines
- Perpendicular lines
- Intersecting lines

3



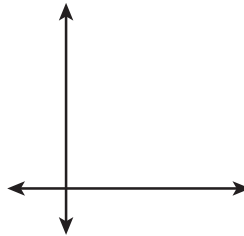
- Parallel lines
- Perpendicular lines
- Intersecting lines

4




- Parallel lines
- Perpendicular lines
- Intersecting lines

5



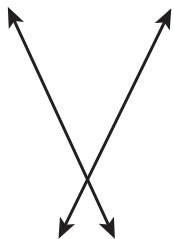
- Parallel lines
- Perpendicular lines
- Intersecting lines

6



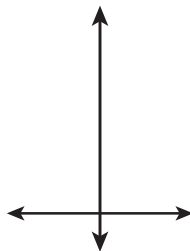
- Parallel lines
- Perpendicular lines
- Intersecting lines

7



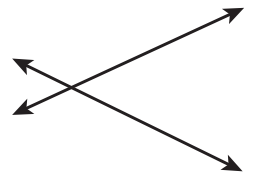
- Parallel lines
- Perpendicular lines
- Intersecting lines

8



- Parallel lines
- Perpendicular lines
- Intersecting lines

9



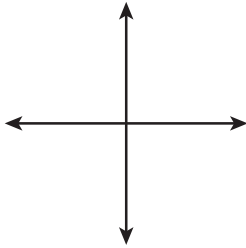
- Parallel lines
- Perpendicular lines
- Intersecting lines

Name: _____

Parallel, Perpendicular, and Intersecting Lines

Answers

1



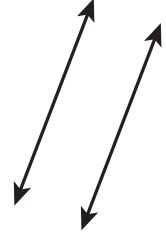
- Parallel lines
- Perpendicular lines
- Intersecting lines

2




- Parallel lines
- Perpendicular lines
- Intersecting lines

3



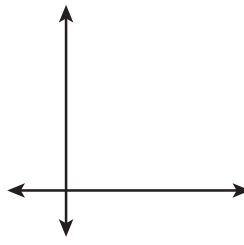
- Parallel lines
- Perpendicular lines
- Intersecting lines

4




- Parallel lines
- Perpendicular lines
- Intersecting lines

5



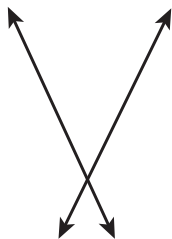
- Parallel lines
- Perpendicular lines
- Intersecting lines

6



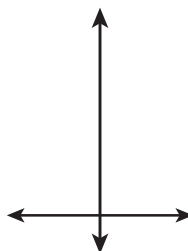
- Parallel lines
- Perpendicular lines
- Intersecting lines

7



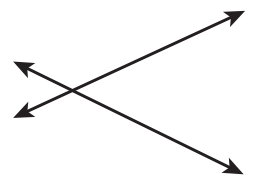
- Parallel lines
- Perpendicular lines
- Intersecting lines

8



- Parallel lines
- Perpendicular lines
- Intersecting lines

9



- Parallel lines
- Perpendicular lines
- Intersecting lines