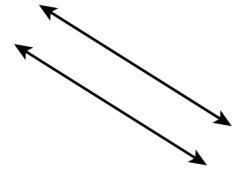
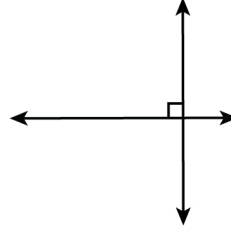
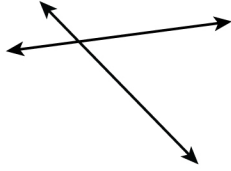



Name: \_\_\_\_\_ Date: \_\_\_\_\_

# Identifying Parallel, Perpendicular and Intersecting Lines

Label each pair of lines as 'Parallel', 'Perpendicular', or 'Intersecting'.

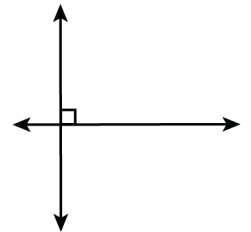

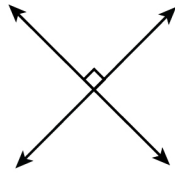
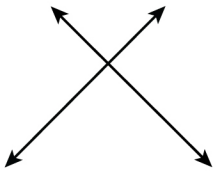


-----

-----

-----

-----

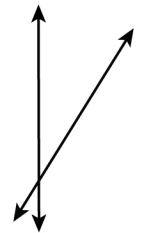
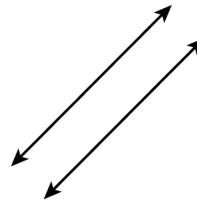
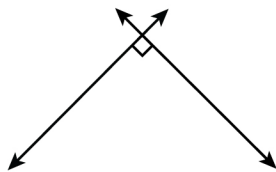
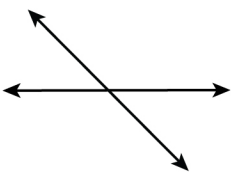


-----

-----

-----

-----

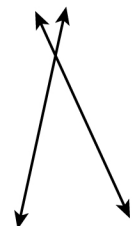
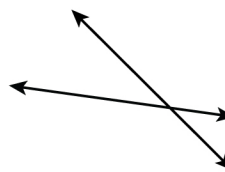
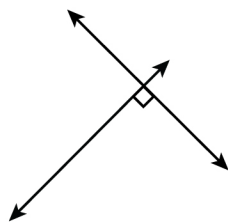


-----

-----

-----

-----



-----


-----

-----

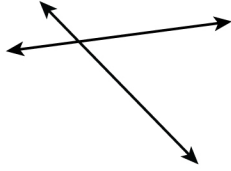
-----

# Identifying Parallel, Perpendicular and Intersecting Lines

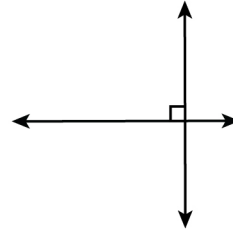
## Answers



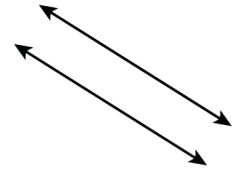
Parallel



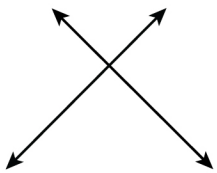
Intersecting



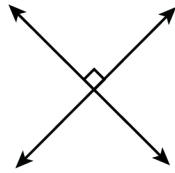
Perpendicular




Parallel



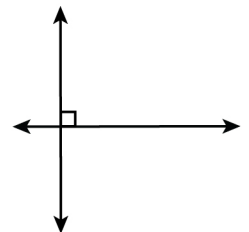
Intersecting



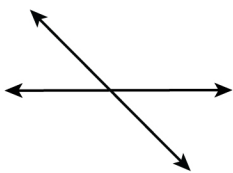
Perpendicular



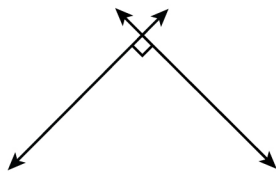
Parallel



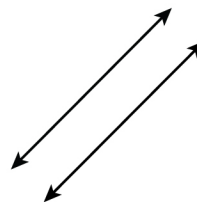
Perpendicular



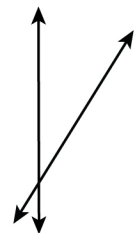
Intersecting



Perpendicular



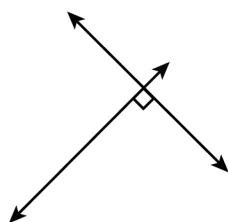
Parallel



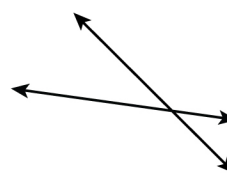
Intersecting



Parallel



Perpendicular



Intersecting



Intersecting