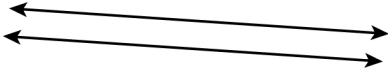


# Working on Parallel and Perpendicular Lines

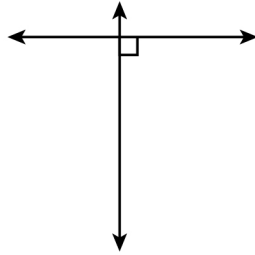
1. Tick the correct box for each set of the following lines.

a



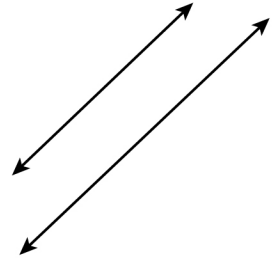
- Parallel  
 Perpendicular

b



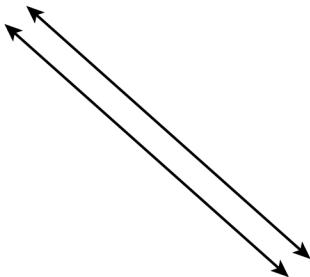
- Parallel  
 Perpendicular

c



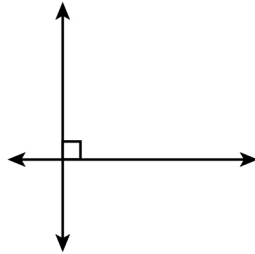
- Parallel  
 Perpendicular

d



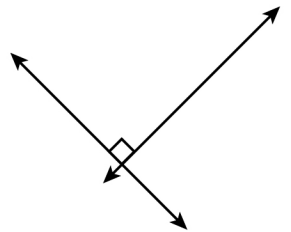
- Parallel  
 Perpendicular

e



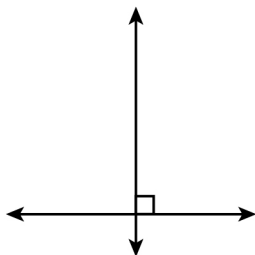
- Parallel  
 Perpendicular

f



- Parallel  
 Perpendicular

g



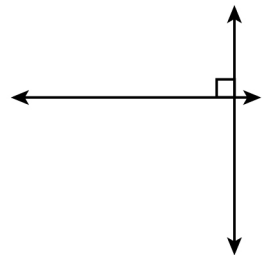
- Parallel  
 Perpendicular

h



- Parallel  
 Perpendicular

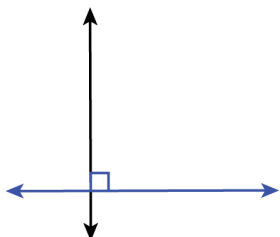
i



- Parallel  
 Perpendicular

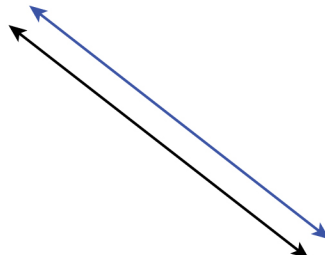
2. Draw the correct line to complete each of the given sets.

a



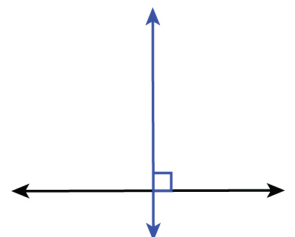
Perpendicular

b



Parallel

c



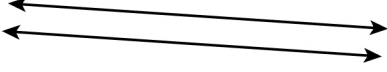
Perpendicular

# Working on Parallel and Perpendicular Lines

1.

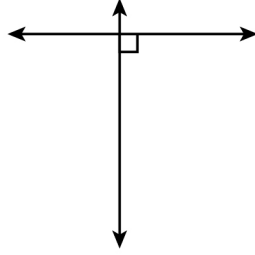
Answers

a



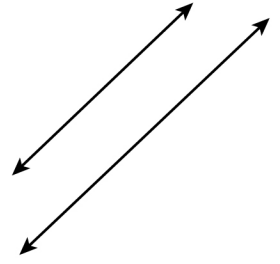
- Parallel  
 Perpendicular

b



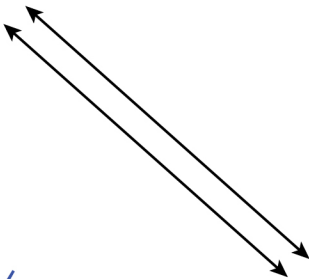
- Parallel  
 Perpendicular

c



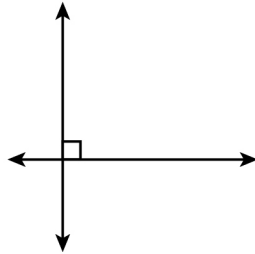
- Parallel  
 Perpendicular

d



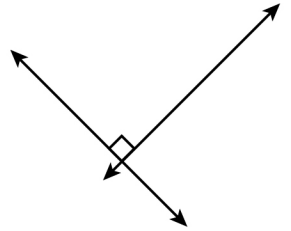
- Parallel  
 Perpendicular

e



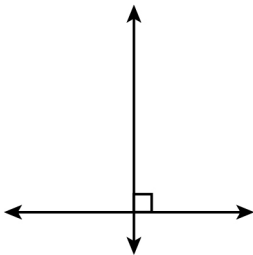
- Parallel  
 Perpendicular

f



- Parallel  
 Perpendicular

g



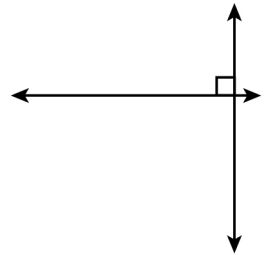
- Parallel  
 Perpendicular

h



- Parallel  
 Perpendicular

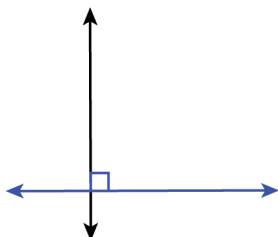
i



- Parallel  
 Perpendicular

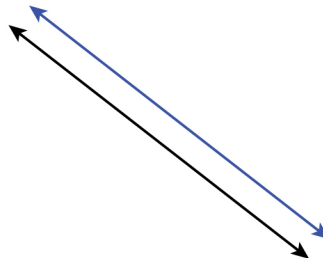
2.

a



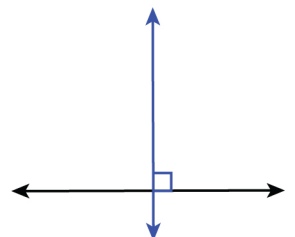
Perpendicular

b



Parallel

c



Perpendicular