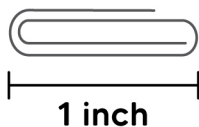


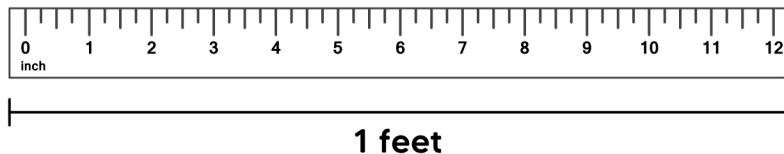
Name: _____

Date: _____

Measuring in Feet and Inches




1 inch is about the length of a paper clip

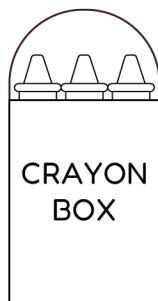


1 foot is the length of a standard ruler. 1 foot = 12 inches.

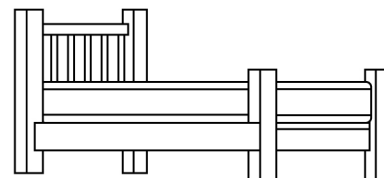
Tick the best estimate of the length or height of each object.



- 2 inches
- 2 feet




- 10 inches
- 10 feet



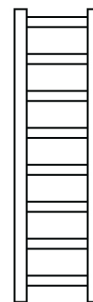
- 7 inches
- 7 feet



- 23 inches
- 23 feet



- 50 inches
- 50 feet

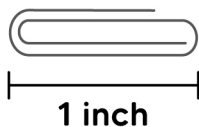


- 8 inches
- 8 feet

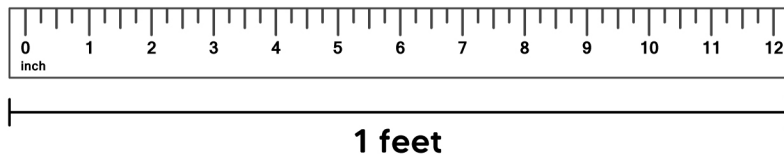
Name: _____

Date: _____

Measuring in Feet and Inches




1 inch is about the length of a paper clip



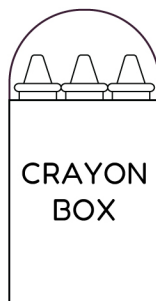
1 foot is the length of a standard ruler. 1 foot = 12 inches.

Answers



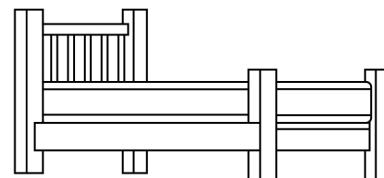
2 inches

2 feet



10 inches

10 feet




7 inches

7 feet



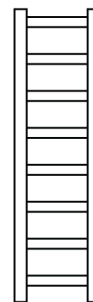
23 inches

23 feet



50 inches

50 feet



8 inches

8 feet