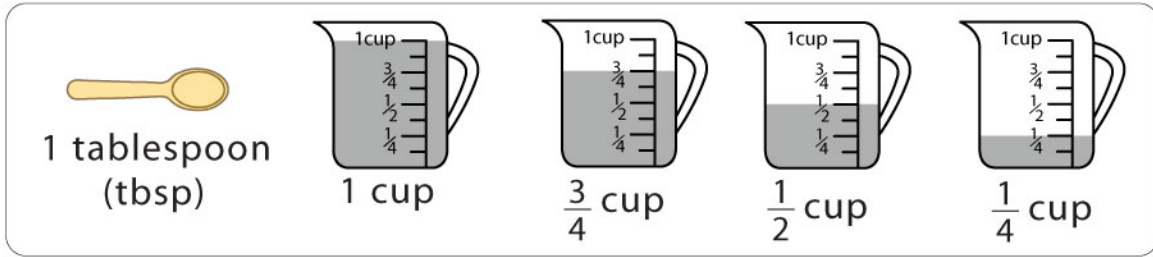


Name: _____

Cooking Measurements












1. Double the given measures and mark the level in the cup.

a)  →  cup

b)  →  cup

c)     →  cup

d)    
    →  cup

2. Convert the following.

a) How many teaspoons are in a tablespoon? _____

b) How many cups are in a gallon? _____

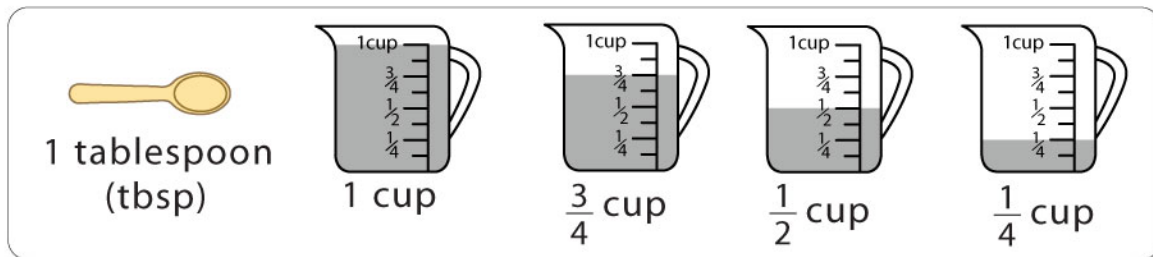
c) There are _____ fluid ounces in a cup.

d) There are _____ cups in half gallon.

e) There are _____ tablespoons in a cup.

Cooking Measurements

Answers



1. Double the given measures and mark the level in the cup.

a) $\frac{1}{4}$ cup \rightarrow $\frac{1}{2}$ cup

b) $\frac{1}{2}$ cup \rightarrow 1 cup

c) 1 tbsp 1 tbsp 1 tbsp 1 tbsp \rightarrow $\frac{1}{4}$ cup

d) 1 tbsp 1 tbsp 1 tbsp 1 tbsp 1 tbsp 1 tbsp 1 tbsp 1 tbsp \rightarrow $\frac{1}{2}$ cup

2. Convert the following.

- a)** How many teaspoons are in a tablespoon? 3
- b)** How many cups are in a gallon? 16
- c)** There are 8 fluid ounces in a cup.
- d)** There are 8 cups in half gallon.
- e)** There are 16 tablespoons in a cup.