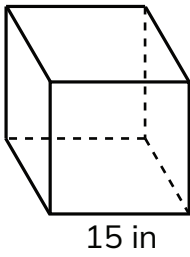


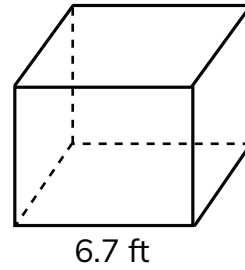
Surface Area of a Cube

Find the surface area of each cube

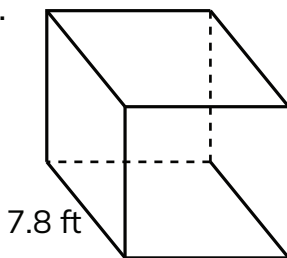
1.



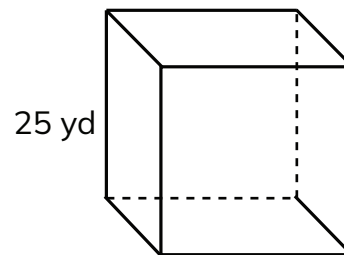
2.



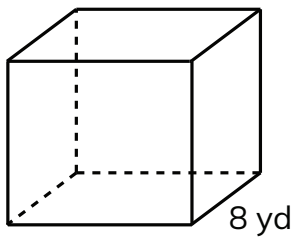
3.



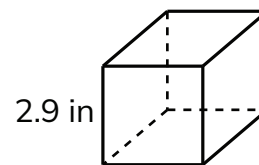
4.



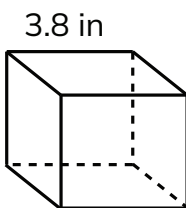
5.



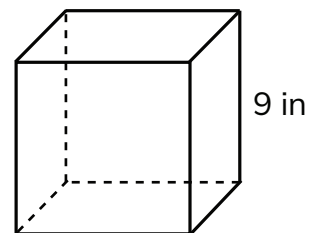
6.



7.



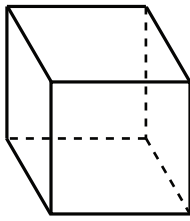
8.



Surface Area of a Cube

Find the surface area of each cube

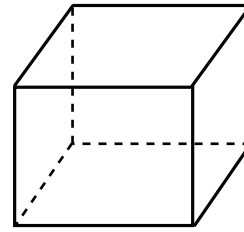
1.



15 in

1350 in²

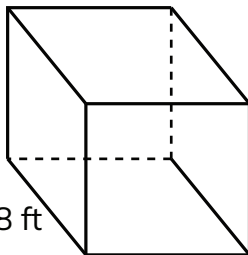
2.



6.7 ft

269.34 ft²

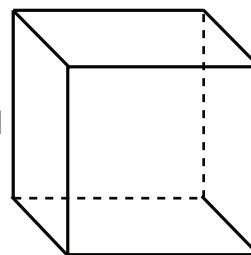
3.



7.8 ft

365.04 ft²

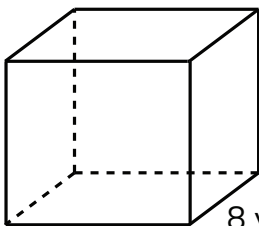
4.



25 yd

3750 yd²

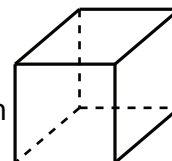
5.



8 yd

384 yd²

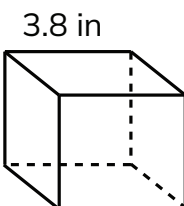
6.



2.9 in

50.46 in²

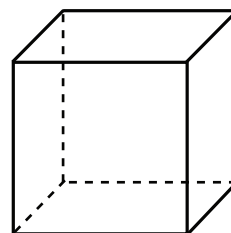
7.



3.8 in

86.64 in²

8.



9 in

486 in²